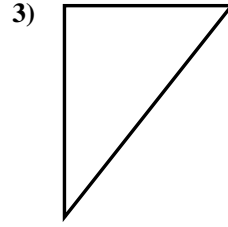
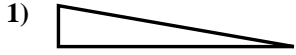


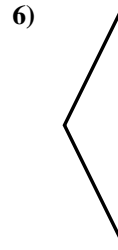
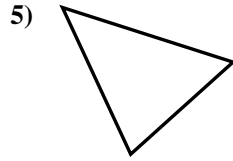
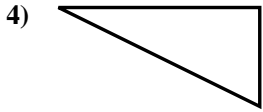


Determine if the triangle shown is a right triangle (yes) or not (no).

Answers



1. _____



2. _____

3. _____

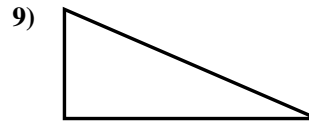
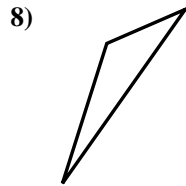

4. _____

5. _____

6. _____

7. _____

8. _____

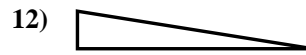
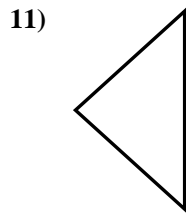
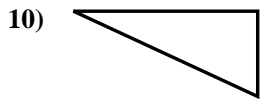


9. _____

10. _____

11. _____

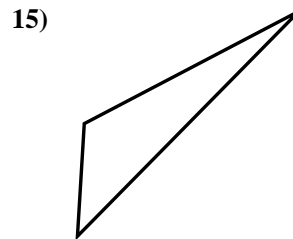
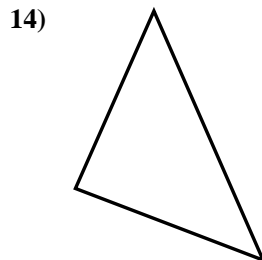
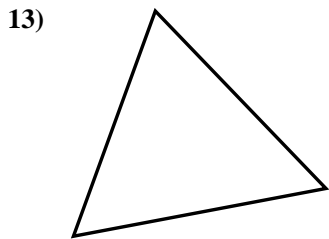
12. _____



13. _____

14. _____

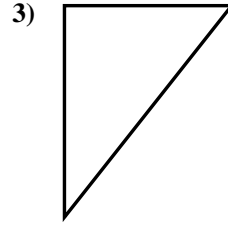
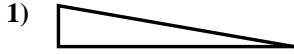
15. _____



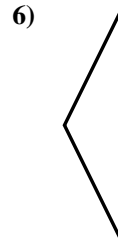
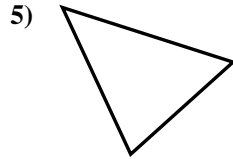
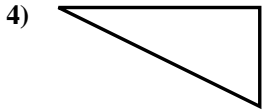


Determine if the triangle shown is a right triangle (yes) or not (no).

Answers



1. yes



2. yes

3. yes

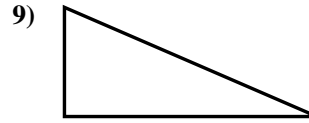
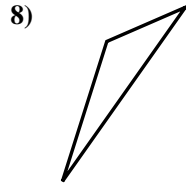

4. yes

5. no

6. no

7. no

8. no

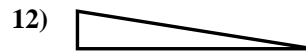
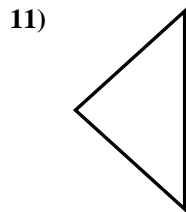
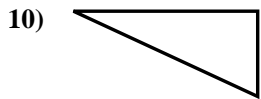


9. yes

10. yes

11. no

12. yes



13. no

14. yes

15. no

